




1- Registre a quantidade de cada dado, depois resolva a adição:




$$\square + \square = \square$$





$$\square + \square = \square$$





$$\square + \square = \square$$





$$\square + \square = \square$$




$$\square + \square = \square$$



$$\square + \square = \square$$



$$\square + \square = \square$$



$$\square + \square = \square$$