

























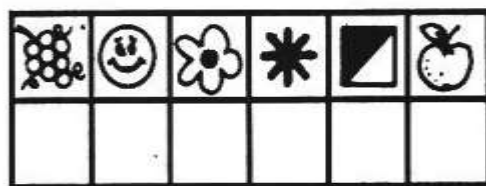
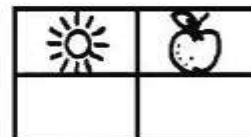





- ◆ Troque os desenhos por letras e escreva as principais consequências dos dois movimentos.

												
A	B	C/Ç	D	E	F	G	H	I	J	K	L	M

										
N	O	P	Q	R	S	T	U	V	X	Z

- ◆ Do movimento de rotação resultam:



- ◆ Do movimento de translação resultam:

