

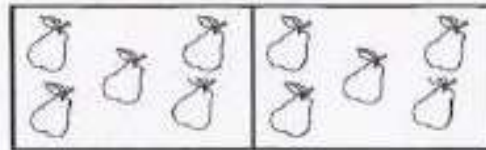
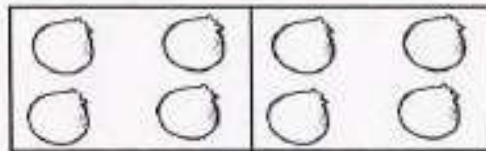
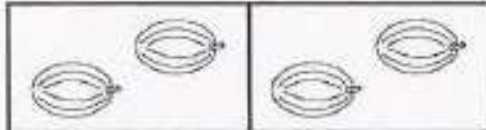
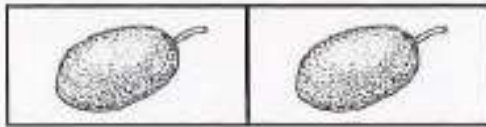


Questão 1 – Complete a tabela ilustrada.



$$2 \times 1 = \square$$

$$2 \times 2 = \square$$

$$2 \times 3 = \square$$

$$2 \times 4 = \square$$

$$2 \times 5 = \square$$

$$2 \times 6 = \square$$

$$2 \times 7 = \square$$

$$2 \times 8 = \square$$

$$2 \times 9 = \square$$

$$2 \times 10 = \square$$