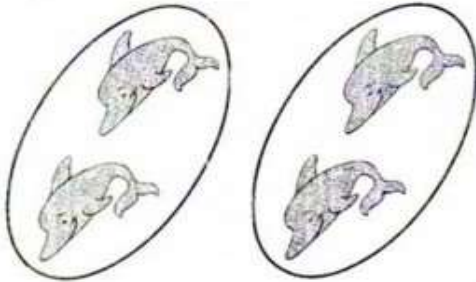




## PRATICANDO

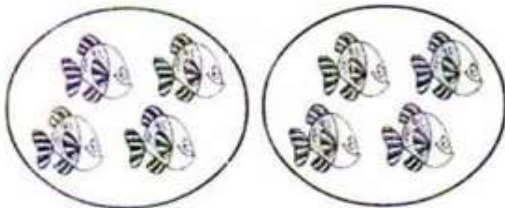
1. Observe as figuras e complete as operações:



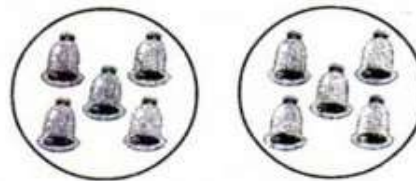
a)  $2 + 2 = \dots\dots\dots$  ou  $2 \times 2 = \dots\dots\dots$



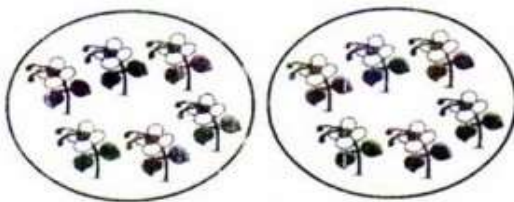
b)  $3 + 3 = \dots\dots\dots$  ou  $2 \times 3 = \dots\dots\dots$




c)  $2 \times 4 = \dots\dots\dots$



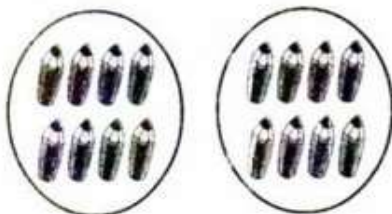
d)  $2 \times 5 = \dots\dots\dots$



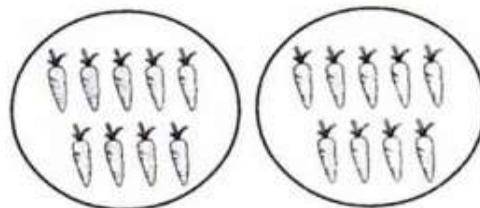
e)  $2 \times 6 = \dots\dots\dots$



f)  $2 \times 7 = \dots\dots\dots$



g)  $2 \times 8 = \dots\dots\dots$



h)  $2 \times 9 = \dots\dots\dots$