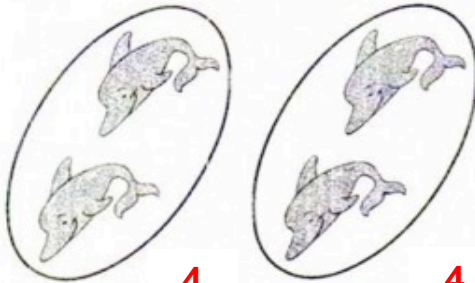




PRATICANDO

1. Observe as figuras e complete as operações:



4

4

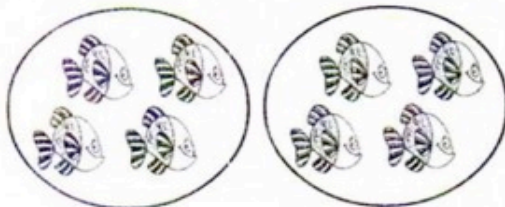
a) $2 + 2 = \dots\dots\dots$ ou $2 \times 2 = \dots\dots\dots$



6

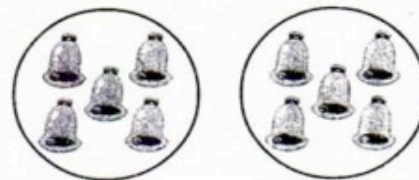
6

b) $3 + 3 = \dots\dots\dots$ ou $2 \times 3 = \dots\dots\dots$



8

c) $2 \times 4 = \dots\dots\dots$



10

d) $2 \times 5 = \dots\dots\dots$



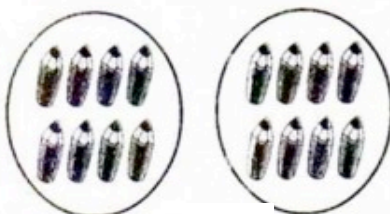
12

e) $2 \times 6 = \dots\dots\dots$



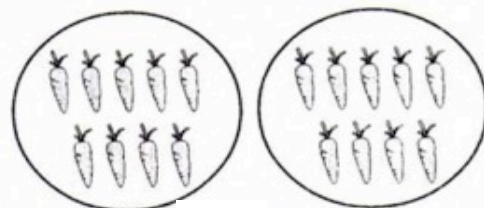
14

f) $2 \times 7 = \dots\dots\dots$



16

g) $2 \times 8 = \dots\dots\dots$



18

h) $2 \times 9 = \dots\dots\dots$