

1- Conte as bolas e faça a subtração com um x:


$8 - 6 =$

.....




$15 - 4 =$

.....




$18 - 8 =$

.....



$11 - 2 =$

.....




$7 - 3 =$

.....



$10 - 9 =$

.....



$5 - 5 =$

.....

